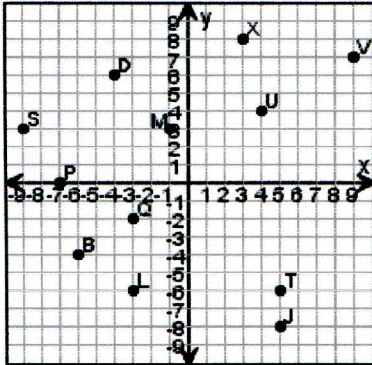


# The Coordinate Plane

Write the coordinates for each point.

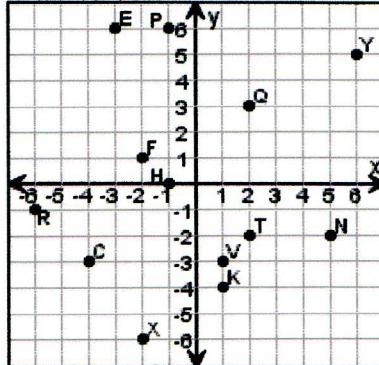
*Review*

1.



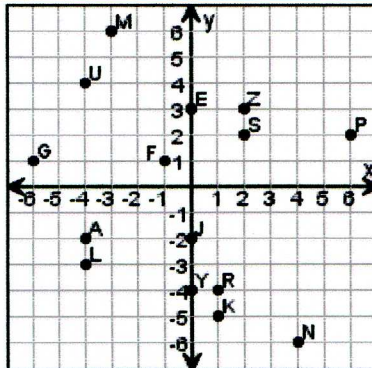
M \_\_\_\_\_  
L \_\_\_\_\_  
S \_\_\_\_\_  
X \_\_\_\_\_  
J \_\_\_\_\_

2.



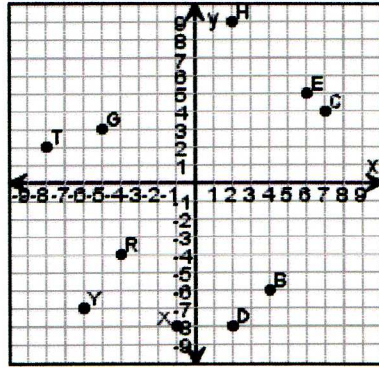
R \_\_\_\_\_  
X \_\_\_\_\_  
N \_\_\_\_\_  
F \_\_\_\_\_  
E \_\_\_\_\_

3.



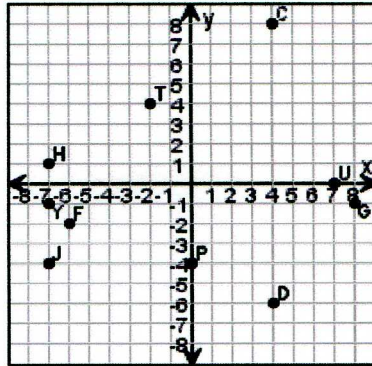
U \_\_\_\_\_  
S \_\_\_\_\_  
L \_\_\_\_\_  
P \_\_\_\_\_  
R \_\_\_\_\_

4.



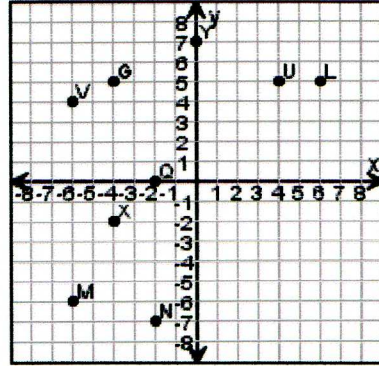
X \_\_\_\_\_  
B \_\_\_\_\_  
C \_\_\_\_\_  
R \_\_\_\_\_  
D \_\_\_\_\_

5.



H \_\_\_\_\_  
D \_\_\_\_\_  
Y \_\_\_\_\_  
F \_\_\_\_\_  
J \_\_\_\_\_

6.



Y \_\_\_\_\_  
U \_\_\_\_\_  
Q \_\_\_\_\_  
G \_\_\_\_\_  
M \_\_\_\_\_