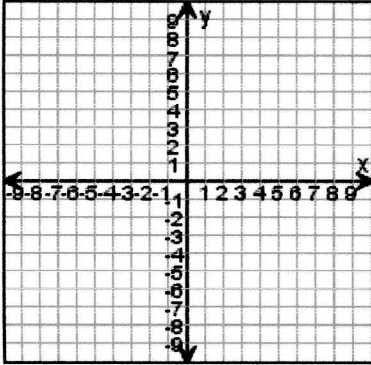


11 - Rapose

# The Coordinate Plane

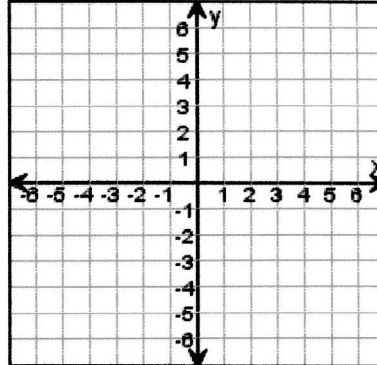
Draw the ordered points on the grid. Label each point.

1.



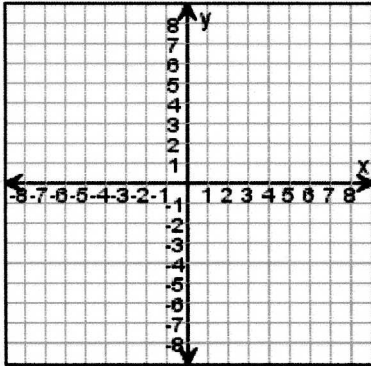
Y (3, -6)  
G (-5, -4)  
K (4, 5)  
U (-2, 6)  
Q (6, 4)  
B (-1, 8)

2.



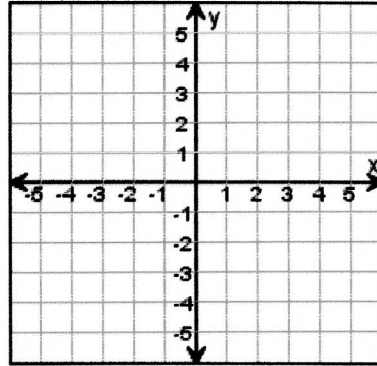
P (1, 2)  
F (0, -1)  
M (6, 0)  
A (-6, 5)  
X (-6, -2)  
D (0, -6)

3.



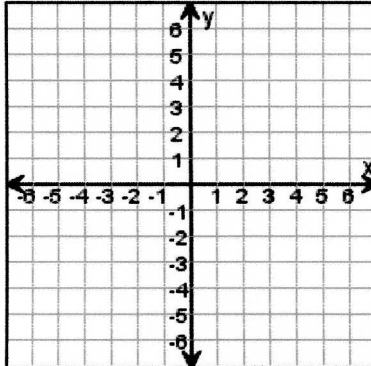
M (-3, -8)  
D (8, 4)  
Q (-8, 3)  
S (3, 1)  
E (7, 5)  
J (-3, -2)

4.



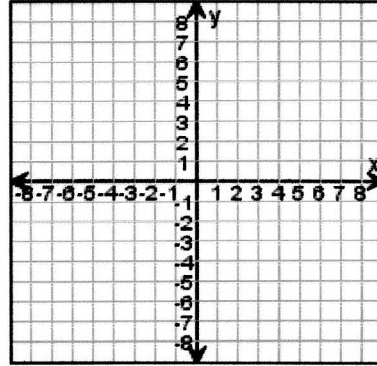
Z (-3, -2)  
T (5, -3)  
V (-3, 1)  
C (3, 0)  
K (5, 1)  
A (3, 5)

5.



A (0, 0)  
K (4, 2)  
Q (-3, 6)  
S (1, 4)  
N (2, -4)  
X (-1, -5)

6.



U (5, -5)  
D (7, -7)  
N (0, -6)  
R (1, -2)  
Z (-6, -8)  
C (-5, 1)