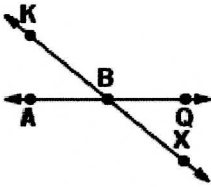


# Angle Relationships

Complete.

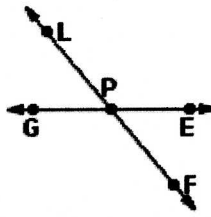
11-16

1.



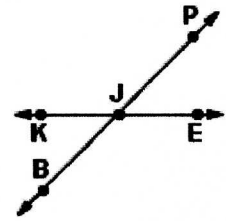
Name a pair of adjacent angles.

2.



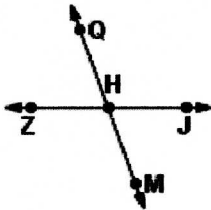
Name a pair of supplementary angles.

3.



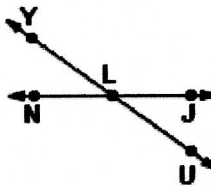
Name a pair of vertical angles.

4.



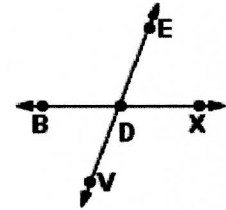
Name a pair of supplementary angles.

5.



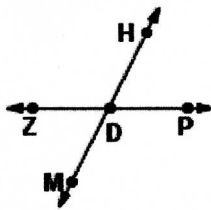
Name a pair of vertical angles.

6.



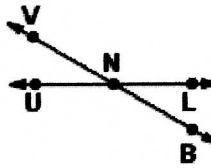
Name a pair of vertical angles.

7.



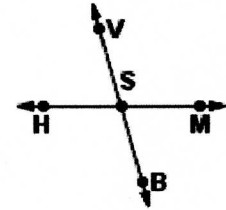
Name a pair of supplementary angles.

8.



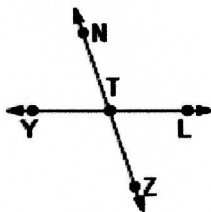
Name a pair of adjacent angles.

9.



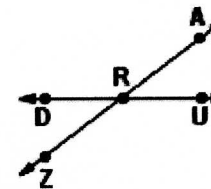
Name a pair of supplementary angles.

10.



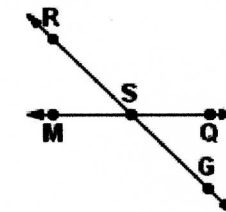
Name a pair of adjacent angles.

11.



Name a pair of vertical angles.

12.



Name a pair of supplementary angles.