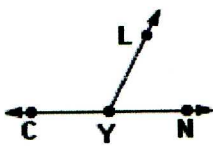


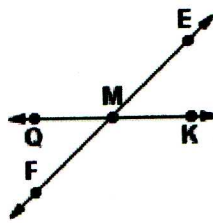
1.



$$m\angle CYL = 117^\circ$$

$$m\angle NYL = 63^\circ$$

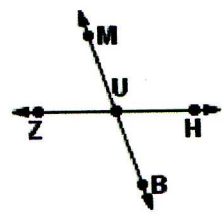
2.



$$m\angle KME = 45^\circ$$

$$m\angle QMF = 45^\circ$$

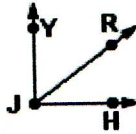
3.



$$m\angle HUB = 72^\circ$$

$$m\angle ZUB = 108^\circ$$

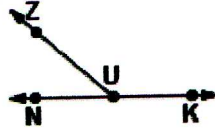
4.



$$m\angle YJR = 53^\circ$$

$$m\angle RJH = 37^\circ$$

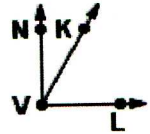
5.



$$m\angle NUZ = 42^\circ$$

$$m\angle KUZ = 138^\circ$$

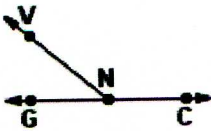
6.



$$m\angle NVK = 30^\circ$$

$$m\angle KVL = 60^\circ$$

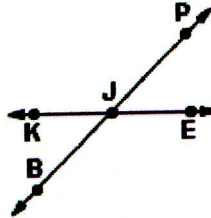
7.



$$m\angle GNV = 40^\circ$$

$$m\angle CNV = 140^\circ$$

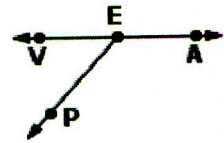
8.



$$m\angle KJB = 46^\circ$$

$$m\angle KJP = 134^\circ$$

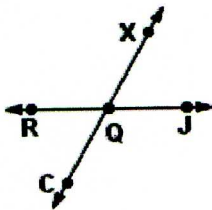
9.



$$m\angle VEP = 49^\circ$$

$$m\angle AEP = 131^\circ$$

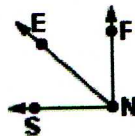
10.



$$m\angle JQX = 61^\circ$$

$$m\angle RQC = 61^\circ$$

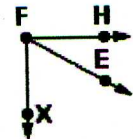
11.



$$m\angle FNE = 47^\circ$$

$$m\angle ENS = 43^\circ$$

12.



$$m\angle XFE = 60^\circ$$

$$m\angle EFH = 30^\circ$$