

Name: _____

Date: _____

Finding angles in triangles

Write the angle measure of each angle.

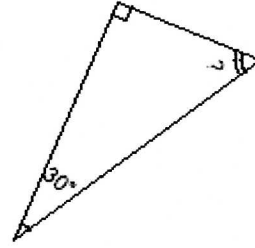
Write your answer under the triangle.

III - 62

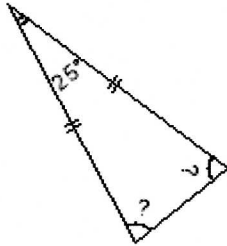
1.1.



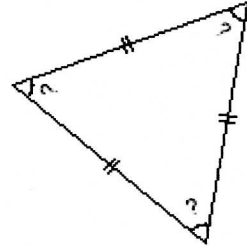
1.2.



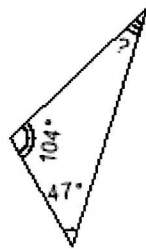
1.3.



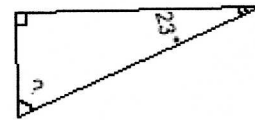
1.4.



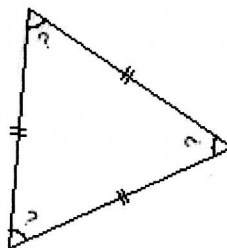
1.5.



1.6.



1.7.



1.8.

